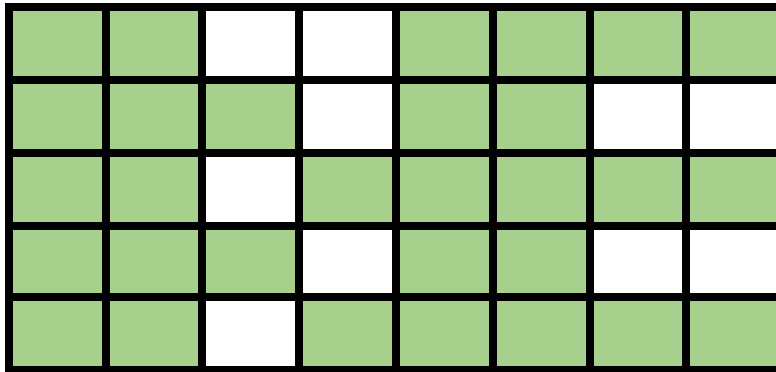


# FRACTIONS, DECIMALS & PERCENTS VISUAL REPRESENTATIONS

How much of the figure is shaded?

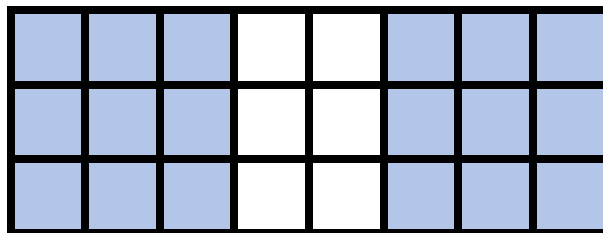


As a FRACTION \_\_\_\_\_

As a PERCENT \_\_\_\_\_

As a DECIMAL \_\_\_\_\_

How much of the figure is shaded?




As a FRACTION \_\_\_\_\_

As a PERCENT \_\_\_\_\_

As a DECIMAL \_\_\_\_\_

How much of the figure is shaded?



As a FRACTION \_\_\_\_\_

As a PERCENT \_\_\_\_\_

As a DECIMAL \_\_\_\_\_